



Junior Infants Maths Online Learning



Sacred Heart JNS
May 5th - May 8th


Dear Parents/ Guardians,

Well done on everything you are doing for your kids each week! We hope the home schooling is going well and that the work we are sending is helpful. We will cover many of the same strands each week as repetition is an important part of the learning process.

Setting the table, tidying toys, cooking, sorting laundry can all be turned into maths lessons so don't stress if you can't get through everything.

This week is Actives School Week so your maths will include being active I hope the kids enjoy. We are really missing all the kids and hope they are doing well at home. Please send any pictures to Ms Healy our HSCL teacher on WhatsApp 0877443779 or by email hscl@shkillinarden.ie. It is lovely to see them, you might even see some of your teachers. All the best,

Ms Walsh, Ms Fitzpatrick, Ms O'Leary and Ms Reilly



Warm Up Games

- Count forwards from 1-20.
- Count backwards from 12.
- Play a maths game on the Junior Infants home page.
- Ask what number comes before or after numbers within 10.
- Play one of last weeks home made games.



Tuesday: Active Home Challenge


How many star jumps can you do in 30 seconds?

I did 34. How about you? Make sure you are counting!

Number of jumps: ____



How many? Let's count!



Draw sets of 5.



teddies

Write the number



Wednesday: Active Home Challenge

How many times can you bounce a ball in 30 seconds? Make sure you are counting!

I got 50. How about you?

Number of bounces: ____



Which bottle is full? Which is empty?



Capacity

Draw a glass that is **full**.

Draw a glass that is **empty**.

Draw a glass that is **nearly full**.

Draw a glass that is **nearly empty**.



Thursday: Active Home Challenge

Make sure you are counting as you do them:

5 hops on one leg, 5 hops on the other leg

10 jumping jacks

8 squats

6 bunny hops

7 claps

Count out 4 of your toys

Count to 10

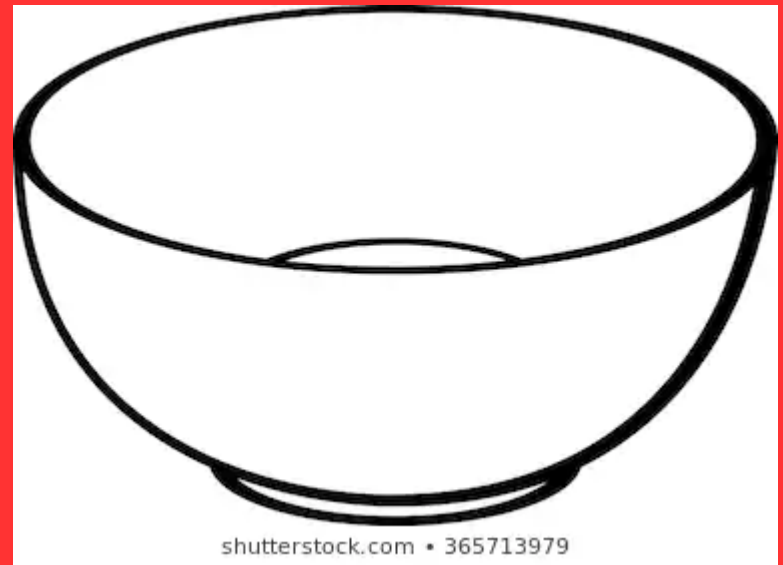
Count back from 10



How many cups of water does it take to fill a bowl?

Make a guess. Try it.

Draw your answer.

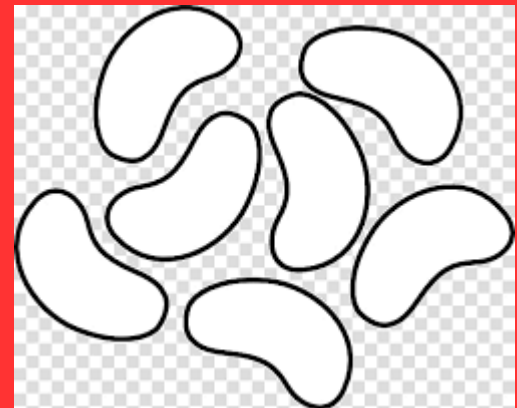


Problem Solving

Draw 5 jellybeans.

Colour 3 red.

How many are white? _____



Friday: Active Home Challenge

Follow these directions: (help from an adult)

1. Go forwards 2 steps.
2. Turn right. Go forwards 3 steps.
3. Turn left. Go forwards 4 steps.
4. Go backwards 5 steps.


Give directions to someone else in your house. Change the directions.





Draw the pictures and write the numbers underneath to combine.



_____ and _____ is the same as _____



_____ and _____ is the same as _____



_____ and _____ is the same as _____




_____ and _____ is the same as _____



Answers



2 and 1 is the same as 3



3 and 2 is the same as 5















2 and 2 is the same as 4



4 and 1 is the same as 5

For those who'd like even more!

	and		makes	<input data-bbox="1636 381 1866 580" type="text"/>
	and	 	makes	<input data-bbox="1642 700 1872 900" type="text"/>
 	and		makes	<input data-bbox="1642 1000 1872 1200" type="text"/>
 	and	 	makes	<input data-bbox="1642 1292 1872 1492" type="text"/>

Well done! You have completed all your work.

I would love to see all your beautiful work. Please send it to Ms Healy our HSCL teacher on WhatsApp 0877443779 or by email hsc1@shkillinarden.ie

