



Junior Infants Maths Online Learning

**MATH
ROCKS**



Sacred Heart JNS
June 15th - June 26th

Hi there,

We hope you had a lovely weekend. This is your last piece of work for the year. We would like to say a big well done for all your super work at home and in school all year! Well done ye are brilliant. Have a fabulous break over the Summer. We can't wait to see you in September,

Ms Walsh, Ms O'Leary, Ms Reilly, Ms Fitzpatrick, Ms Heavey and Ms Duff



Let's sing the Days of the Week song!

<https://www.youtube.com/watch?v=mXMofxtDPUQ>

What day is it today?

What day was it yesterday?

If today is_____ what day will it be
tomorrow?

What month is it?

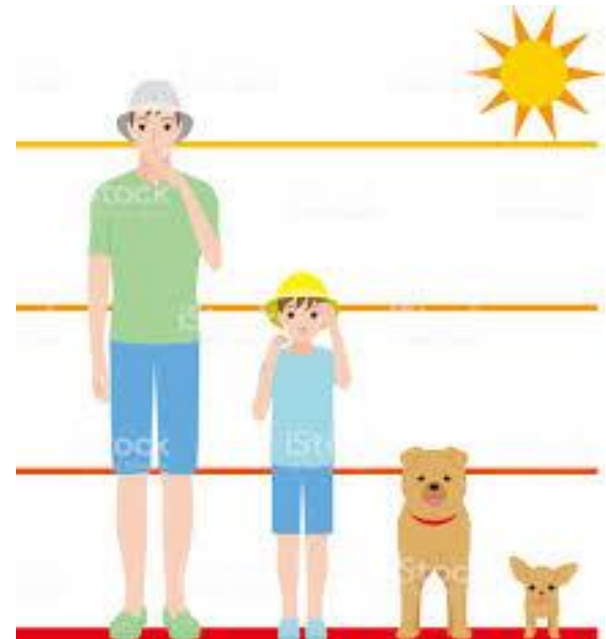
What season are we in?

Can you remember the 4 seasons?

Measures

Who is the tallest person in your house?

Line up each member of your family starting with the shortest person.



Which is **longer**?

Q1. Point to (or draw) the longest object in each question.



Q2.




Q3.



Q4.



Continue the patterns below:



Now draw and colour your own 3 part pattern.

Match the number to the correct amount!



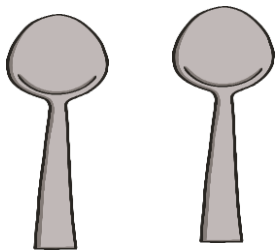
4



2



3




1



5

Which teddy is first?



Which star is second?





Which monster is last?





Who is last?








2 and 3





3 and 1




5 and 0



1 and 2



4 and 0




Match these to the correct glass!

Full

Empty

Nearly full

Nearly empty






How many 2D shapes can you see?



What are these shapes called?



Let's sing the shape song!

<https://www.youtube.com/watch?v=OEbRDtCAFdU>

Can you guess the shape??

I have **no** corners and I have 1 side. What am I??





I have 4 corners, 4 **sides** that are **all the same length!**
What am I??

I have 3 corners and 3 sides. What am I??

I have 4 corners and 4 sides. 2 sides are long and 2 sides are short. What am I??


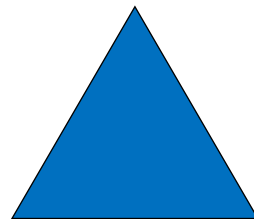

After

Write/ name the numeral that comes after





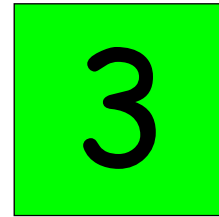


Between

Write/ name the numeral that comes between



Before








Write/name the numeral that comes before.



Zoo Block Diagram



Colour a box for each item that you find.

6							
5							
4							
3							
2							
1							
							

Which animal is there most of?

How many tigers are there?

Are there more pandas or birds ?

How many elephants and zebras are there altogether?

How many two legged animals can you find?

Number Pairs to 5

Join the pairs of numbers that add up to 5.

3

1

5

2

4

0

2



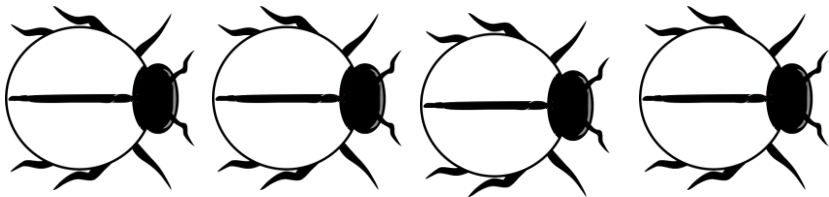

1

4

3


Add 1

Draw one more. How many are there now?



How Many Are Under The Bowl?

Get 5 counters. Hide some of them under a bowl/cup and leave the rest visible. Ask your child to identify how many are under the bowl. Take turns hiding and guessing



If struggling start with fewer counters and if finding it easy try 6/7 counters.

Money




Count out/draw the correct amount of coins for each object

1c



5c



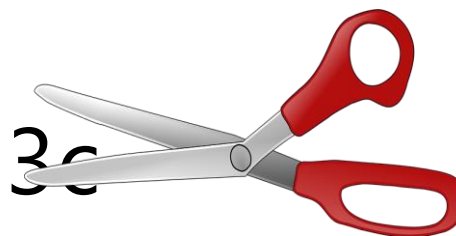
2



4c



3c



How much money is there in each box?



End of Year Test Time!!

- Show your child the numbers 0-10 and check if they recognise them
- Ask your child to count from 1 and check how far they can count with no mistakes
- Ask them to count backwards from 10 or 5
- Call out the numbers 0-5 and ask your child to write them down
- Check if your child can match the correct number to the correct amounts within 10

WELL DONE!



Well done! You have completed all your work. Have a great Summer!!



YOU DID IT!
GREAT JOB!
I'M PROUD
OF YOU.



hello
SUMMER

